


**D.K.M. COLLEGE FOR WOMEN (AUTONOMOUS)
APTITUDE TEST**

Number Puzzles – Test 16

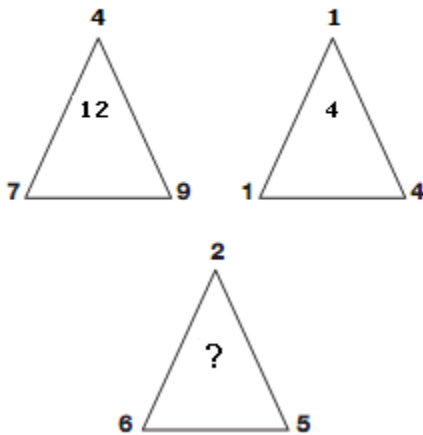
1. What number comes inside the circle?



- a) 6
- c) 7

- b) 8
- d) 5

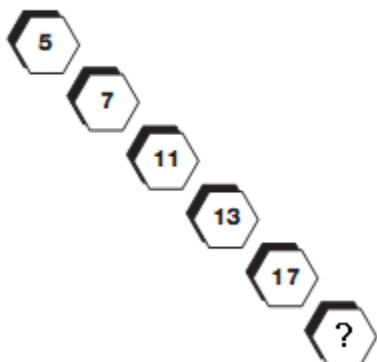
2. Which number replaces the question mark?



- a) 2
- c) 5

- b) 13
- d) 9

3. Which number completes the puzzle?




D.K.M. COLLEGE FOR WOMEN (AUTONOMOUS)
APTITUDE TEST

- a) 18
- c) 19

- b) 12
- d) 11

4. Which number replaces the question mark?



- a) 16
- c) 12

- b) 15
- d) 11

5. Which number replaces the question mark?



- a) 37
- c) 35

- b) 38
- d) 39

**D.K.M. COLLEGE FOR WOMEN (AUTONOMOUS)
APTITUDE TEST**

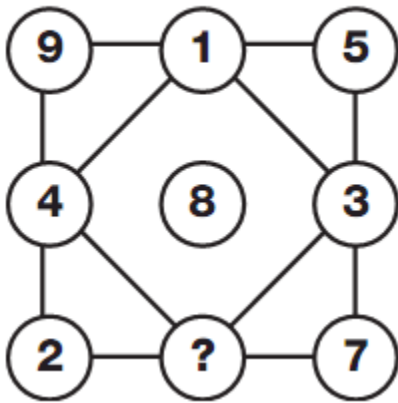
6. Which number replaces the question mark?

7	3	6	2
2	8	5	4
1	1	2	4
4	2	1	?

- a) 2
- c) 9

- b) 4
- d) 8

7. Which letter replaces the question mark?



- a) 3
- c) 2

- b) 6
- d) 1

8. What is missing from the hexagon?

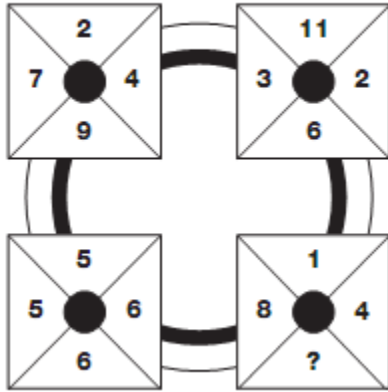


- a) 45
- c) 43

- b) 41
- d) 40

**D.K.M. COLLEGE FOR WOMEN (AUTONOMOUS)
APTITUDE TEST**

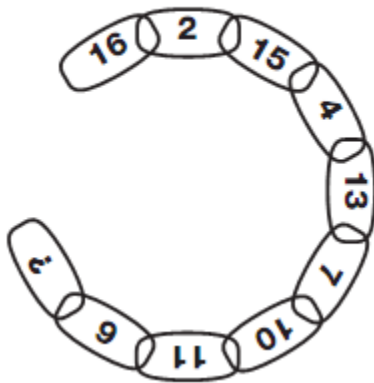
9. Which number replaces the question mark?



- a) 3
- c) 9

- b) 6
- d) 7

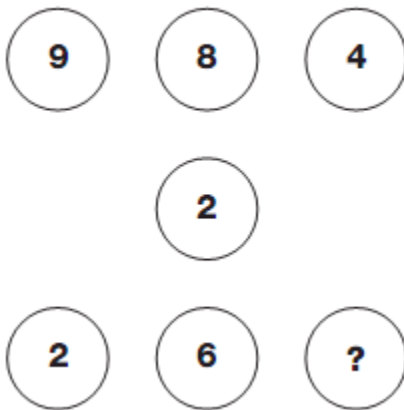
10. Which number replaces the question mark?



- a) 15
- c) 12

- b) 16
- d) 14

11. Which number replaces the question mark?

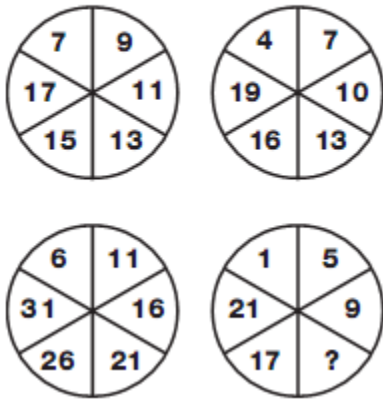


- a) 4
- c) 9

- b) 5
- d) 7

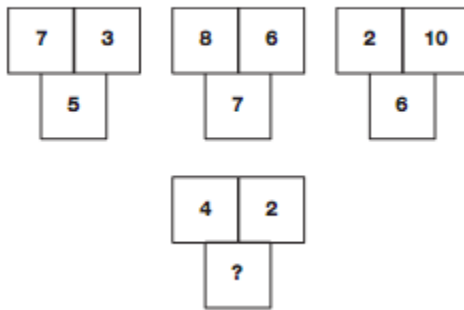
**D.K.M. COLLEGE FOR WOMEN (AUTONOMOUS)
APTITUDE TEST**

12. Which number replaces the question mark?



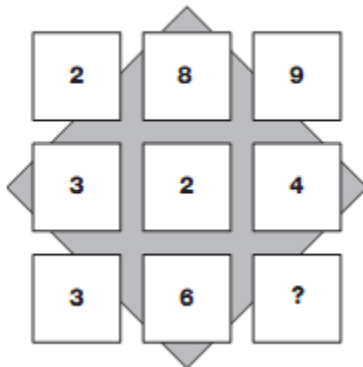
- | | |
|-------|-------|
| a) 13 | b) 16 |
| c) 15 | d) 14 |

13. Which number replaces the question mark?



- | | |
|------|------|
| a) 5 | b) 4 |
| c) 2 | d) 3 |

14. Which number replaces the question mark?



- | | |
|------|------|
| a) 8 | b) 4 |
| c) 1 | d) 3 |

**D.K.M. COLLEGE FOR WOMEN (AUTONOMOUS)
APTITUDE TEST**

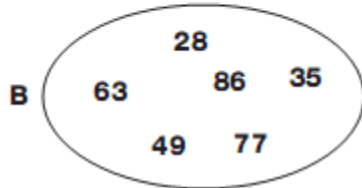
15. Which number replaces the question mark?



- a) 6,1
- c) 4,1

- b) 5,1
- d) 8,1

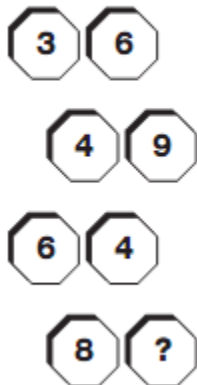
16. Which number is the odd one out in each oval?



- a) A:58 B:86
- c) A:54 B:82

- b) A:55 B:85
- d) A:56 B:81

17. Which number replaces the question mark?

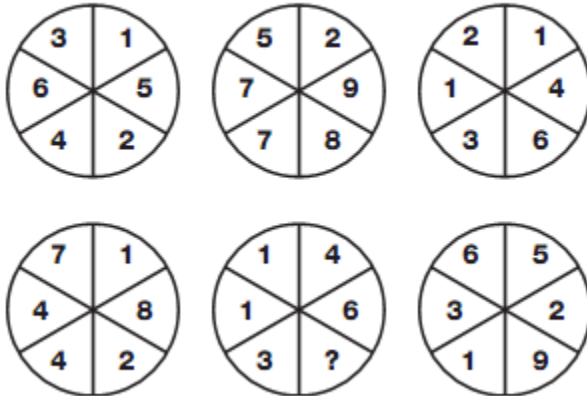


- a) 2
- c) 7

- b) 5
- d) 1

**D.K.M. COLLEGE FOR WOMEN (AUTONOMOUS)
APTITUDE TEST**

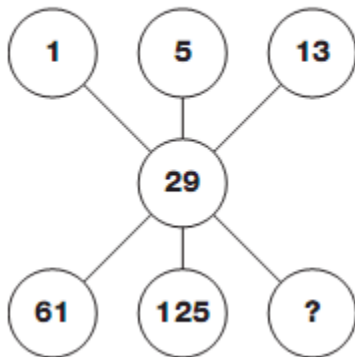
18. Which number replaces the question mark?



- a) 5
- c) 7

- b) 3
- d) 2

19. Which number replaces the question mark?



- a) 120
- c) 200

- b) 253
- d) 215

20. Which number replaces the question mark?



- a) 30
- c) 40

- b) 45
- d) 51

**D.K.M. COLLEGE FOR WOMEN (AUTONOMOUS)
APTITUDE TEST**

21. Which number replaces the question mark?

10	
8	13
16	6
4	19
22	?

- a) 10
- c) 12

- b) 2
- d) 15

22. Which number replaces the question mark?

3	1	4
7	2	9
1	5	?

- a) 6
- c) 3

- b) 4
- d) 2

23. Which number replaces the question mark?




- a) 5
- c) 9

- b) 3
- d) 10

**D.K.M. COLLEGE FOR WOMEN (AUTONOMOUS)
APTITUDE TEST**

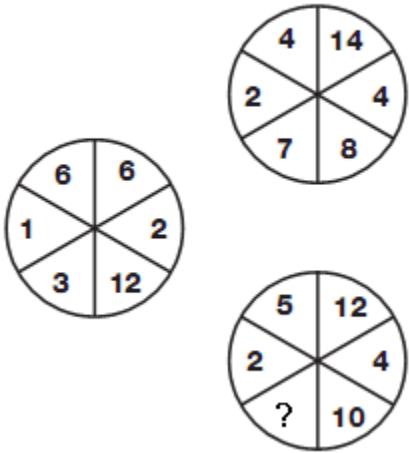
24. Which number replaces the question mark?



- a) 23
- c) 10

- b) 22
- d) 15

25. Which number replaces the question mark?



- a) 5
- c) 4

- b) 9
- d) 6