
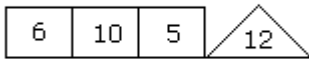



Aptitude Test

**Replace of Number – Test 12**

1. Which one will replace the question mark ?



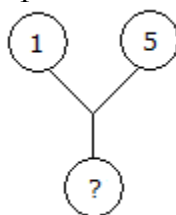
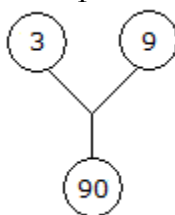
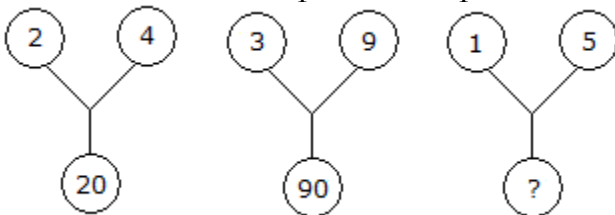
- a) 8    b) 12    c) 16    d) 20

2. Which one will replace the question mark ?

7	4	5
8	7	6
3	3	?
29	19	31

- a) 3    b) 5    c) 4    d) 6

3. Which one will replace the question mark ?



- a) 75    b) 26    c) 25    d) 20

Aptitude Test

4. Which one will replace the question mark ?

7	9	21	27
4	2	36	18
9	4	54	?

- a) 18      b)24      c)36      d)58

5. Which one will replace the question mark ?

16	28	29
13	12	16
14	10	15
15	30	?

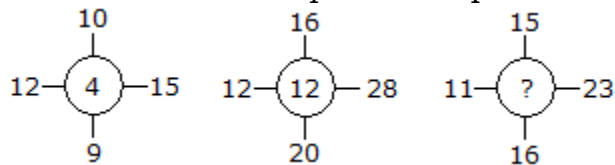
- a) 60      b)30      c)20      d)45

6. Which one will replace the question mark ?

3	15	4
7	38	5
3	?	5

- a) 15      b)19      c)20      d)18

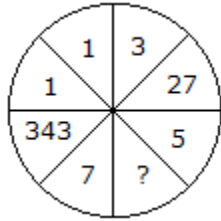
7. Which one will replace the question mark ?



- a) 11      b)14      c)10      d)12

Aptitude Test

8. Which one will replace the question mark ?



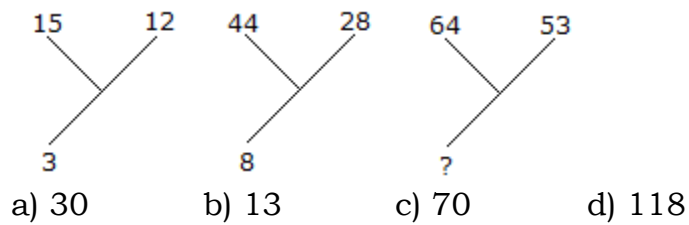
- a) 25      b) 625      c) 125      d) 50

9. Which one will replace the question mark ?

4	9	2
3	5	7
8	1	?

- a) 9      b) 6      c) 125      d) 50

10. Which one will replace the question mark ?



- a) 30      b) 13      c) 70      d) 118

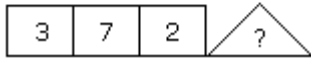

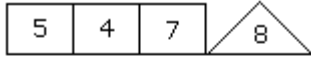
11. Which one will replace the question mark ?

A <sub>2</sub>	C <sub>4</sub>	E <sub>6</sub>
G <sub>3</sub>	I <sub>5</sub>	?
M <sub>5</sub>	O <sub>9</sub>	Q <sub>14</sub>

- a) L<sub>10</sub>      b) K<sub>15</sub>      c) I<sub>15</sub>      d) K<sub>8</sub>

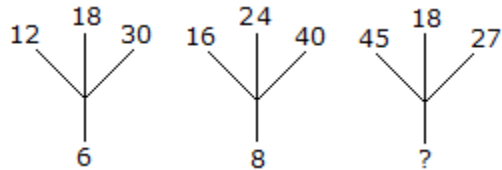
Aptitude Test

12. Which one will replace the question mark ?



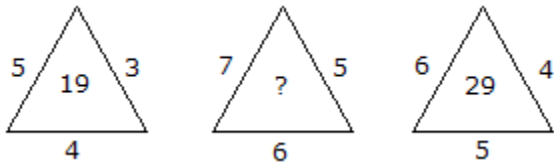
- a) 1      b)4      c)3      d)6

13. Which one will replace the question mark ?



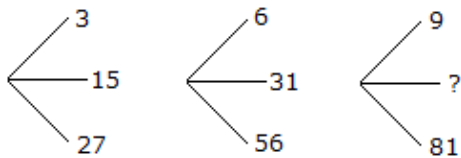
- a) 18      b)12      c)9      d)6

14. Which one will replace the question mark ?



- a) 25      b)37      c)41      d)47

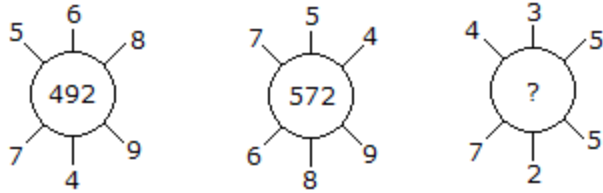
15. Which one will replace the question mark ?



- a) 45      b) 41      c) 32      d) 40

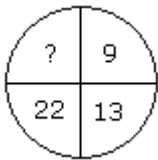
Aptitude Test

16. Which one will replace the question mark ?



- a) 115    b) 130    c) 135    d) 140

17. Which one will replace the question mark ?



- a) 40    b) 38    c) 44    d) 39

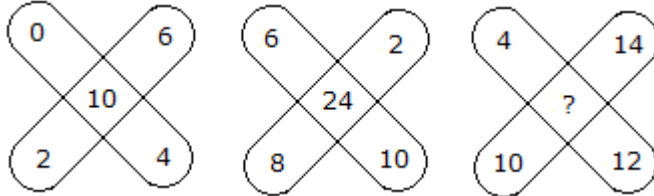
18. Which one will replace the question mark ?

18	24	32
12	14	16
3	?	4
72	112	128

- a) 2    b) 3    c) 4    d) 5

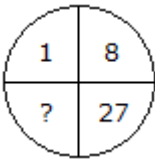
Aptitude Test

19. Which one will replace the question mark ?



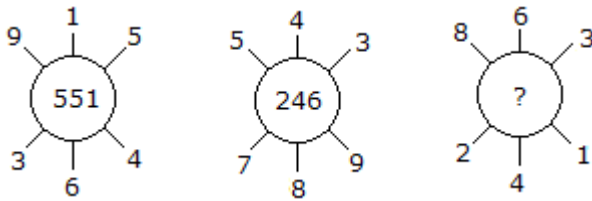
- a) 2      b) 3      c) 4      d) 5

20. Which one will replace the question mark ?



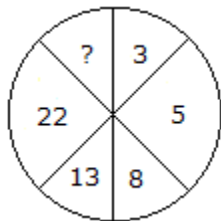
- a) 41      b) 64      c) 35      d) 61

21. Which one will replace the question mark ?



- a) 262      b) 622      c) 631      d) 824

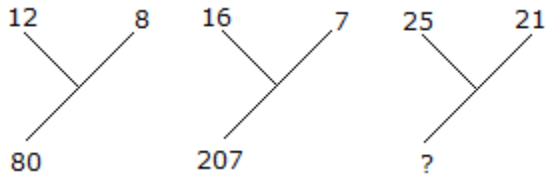
22. Which one will replace the question mark ?



- a) 45      b) 29      c) 39      d) 37

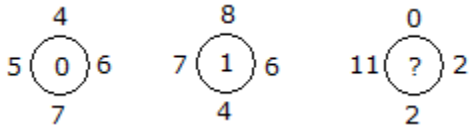
23. Which one will replace the question mark ?

Aptitude Test



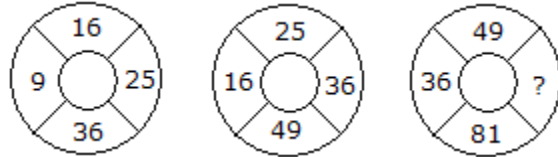
- a) 184      b) 210      c) 241      d) 425

24. Which one will replace the question mark ?



- a) 0      b) 2      c) 11      d) 12

25. Which one will replace the question mark ?



- a) 64      b) 144      c) 169      d) 25